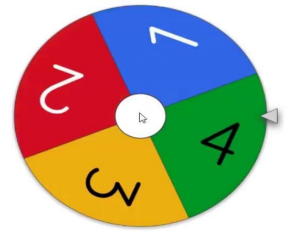


PICK A GAME PIECE



SPINNER



clideo.com

HELPFUL TIPS

PRESS TO VIEW THE GAME, CLICK ON QUESTIONS AND CLICK THE SPINNER

PRESS TO EXIT PRESENTATION MODE AND MOVE YOUR GAME PIECE



The map shows the Lewis and Clark Expedition route starting at Fort Clatsop on the Columbia River, heading west through Spanish Territory, crossing the Rocky Mountains, and ending at St. Louis. Key locations include Fort Clatsop, the Columbia River, the Marias River, the Missouri River, and the Mississippi River. Historical events marked include the death of Sgt. Floyd and the acquisition of the Louisiana Territory in 1803. Major cities like Philadelphia and Washington D.C. are also shown.

Thomas Jefferson was America's _____ president.

3rd

4th

5th

6th

**LEWIS AND CLARK
EXPEDITION**
1804-1806

Thomas Jefferson made the Louisiana Purchase in _____.

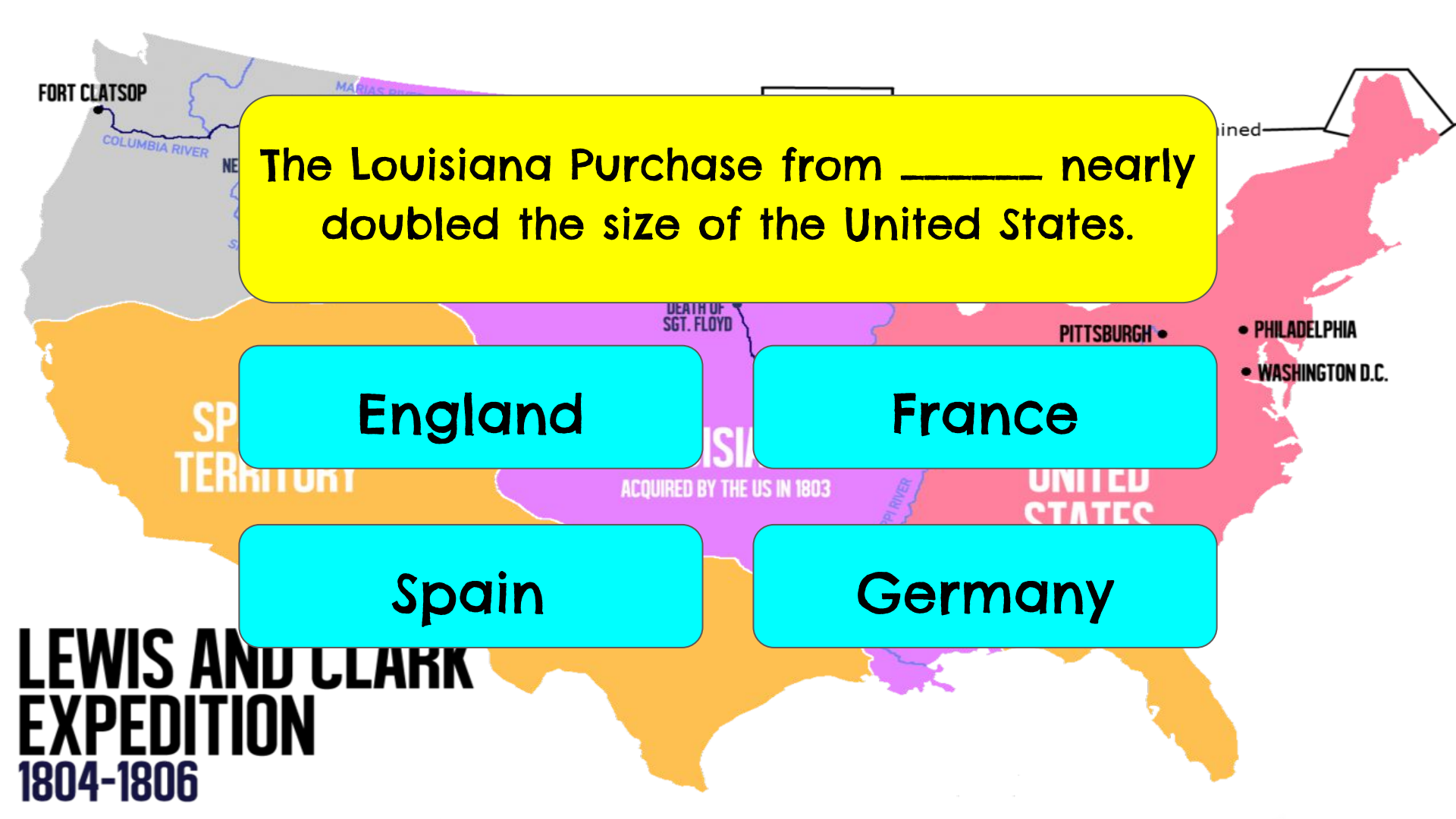
1797

1799

1801

1803

**LEWIS AND CLARK
EXPEDITION
1804-1806**



The Louisiana Purchase from _____ nearly doubled the size of the United States.

England

France

Spain

Germany

**LEWIS AND CLARK
EXPEDITION
1804-1806**



The Louisiana Purchase stretched from the _____ River to the Rocky Mountains.

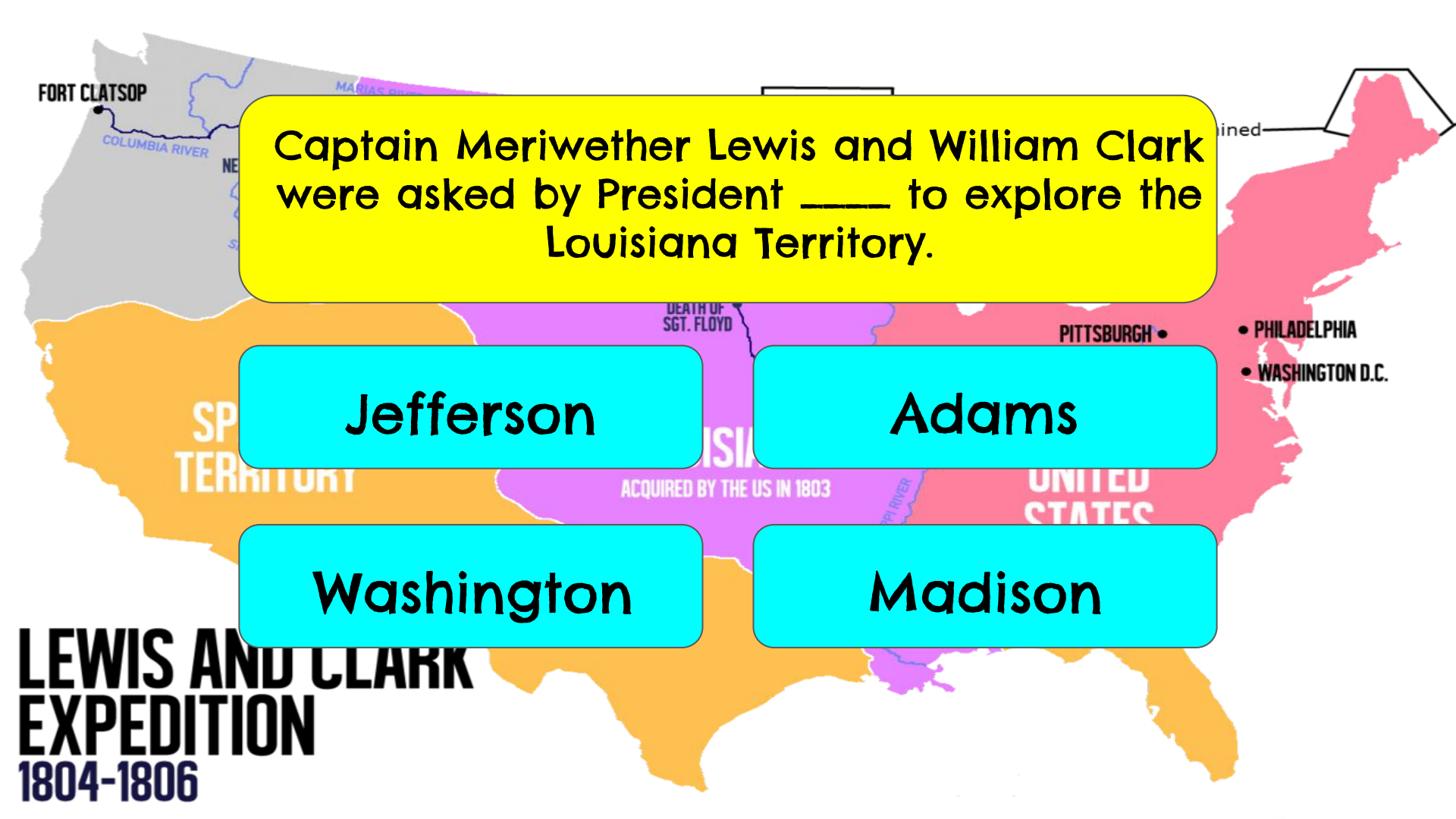
Mississippi

Ohio

Colorado

Missouri

**LEWIS AND CLARK
EXPEDITION
1804-1806**

A map of the United States showing the Lewis and Clark Expedition route. The route is highlighted in purple, starting from St. Louis and going west to the Pacific Ocean. Key locations marked include Fort Clatsop, the Columbia River, the Marias River, and the death of Sgt. Floyd. The map also shows the Louisiana Territory (acquired by the US in 1803) in orange, the Spanish Territory in yellow, and the United States in pink. Major cities like Philadelphia and Washington D.C. are marked in the east. A yellow text box is overlaid on the map, and four cyan buttons are arranged in a 2x2 grid below it.

Captain Meriwether Lewis and William Clark were asked by President ____ to explore the Louisiana Territory.

Jefferson

Adams

Washington

Madison

**LEWIS AND CLARK
EXPEDITION
1804-1806**

A map of the United States showing the route of the Lewis and Clark Expedition. The route starts at St. Louis, Missouri, and goes west to the Rocky Mountains, then south to the Gulf of Mexico, and back east to St. Louis. The map is color-coded: orange for the western part, purple for the central part, and pink for the eastern part. Key locations and events are marked: Fort Clatsop, Columbia River, Marias River, Death of Sgt. Floyd, Pittsburgh, Philadelphia, and Washington D.C. The text 'SP TERRITORY' is visible in the orange area, 'ACQUIRED BY THE US IN 1803' in the purple area, and 'UNITED STATES' in the pink area. A yellow box is overlaid on the map with a question, and four cyan boxes are overlaid with answer options.

The Corps of Discovery traveled about ____ miles everyday.

4

6

10

15

**LEWIS AND CLARK
EXPEDITION**
1804-1806

A map of the United States showing the Lewis and Clark expedition route. The route starts at St. Louis, Missouri, and goes west through the Louisiana Territory (purple), then through the Spanish Territory (orange), and finally reaches the Pacific Ocean at Fort Clatsop, Oregon. Key locations marked include Fort Clatsop, the Columbia River, the Marias River, the death of Sgt. Floyd, and the acquisition of the Louisiana Territory in 1803. The eastern United States (pink) shows Philadelphia and Washington D.C. as starting points for the expedition.

The Lewis and Clark expedition took _____ years, four months and ten days.

2

4

6

8

**LEWIS AND CLARK
EXPEDITION
1804-1806**