

MULTI-DIGIT MULTIPLICATION

WIZARD QUEST

BOOK OF SPELLS
16 Lisa reads 28 pages in her book each day. Gia reads 14 times as many pages as Lisa. How many pages does Gia read?

MAGIC CHARM
7 Find the product 62×95

MAGIC CHARM
5 Find the product 47×28

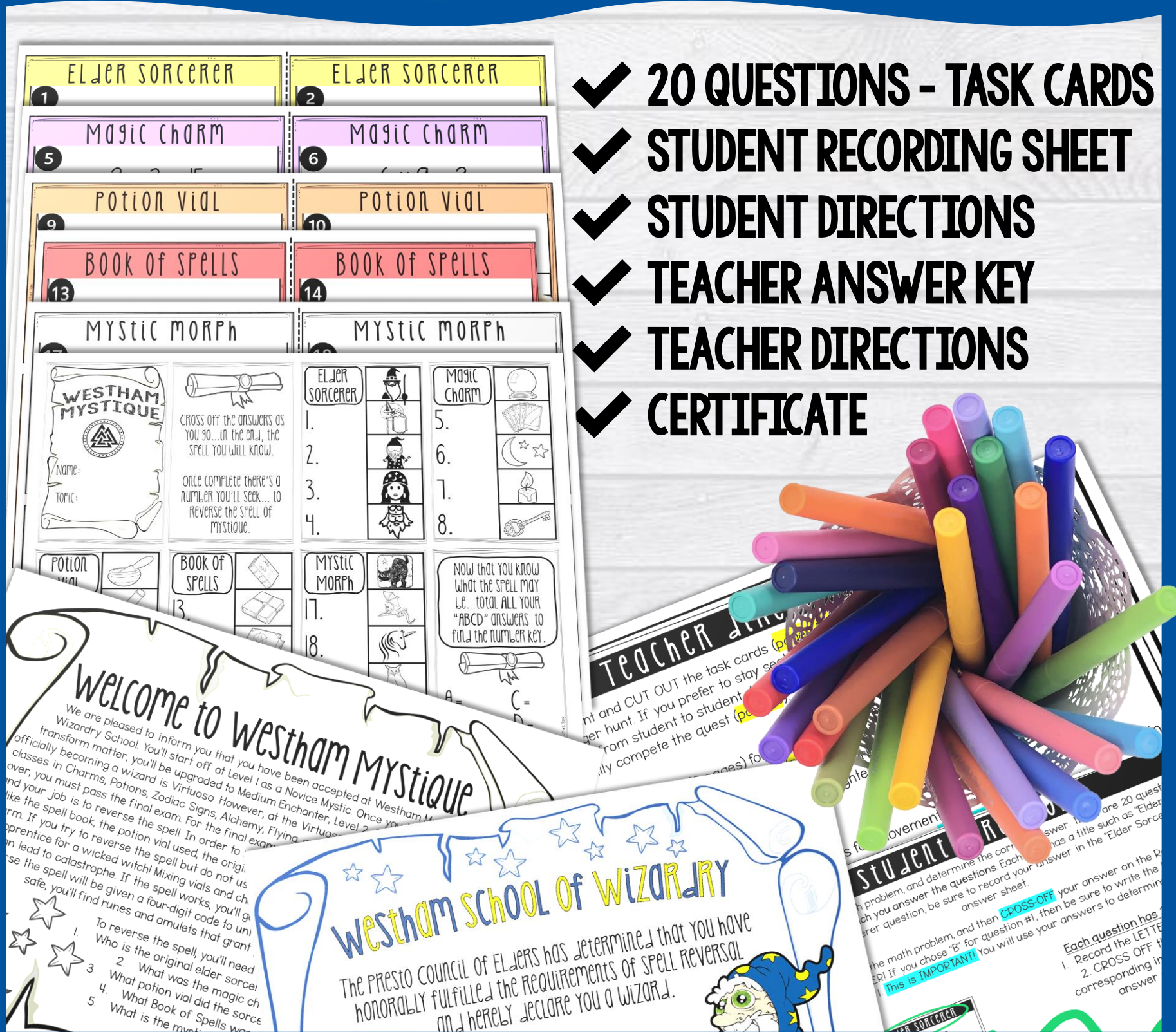
MAGIC CHARM
6 Find the product 47×28

MAGIC CHARM
8 Find the product 62×95

THINK TANK

WHAT'S INCLUDED?

- ✓ 20 QUESTIONS - TASK CARDS
- ✓ STUDENT RECORDING SHEET
- ✓ STUDENT DIRECTIONS
- ✓ TEACHER ANSWER KEY
- ✓ TEACHER DIRECTIONS
- ✓ CERTIFICATE



ELIMINATE CHOICES

Potion Vial
Find the product
 863×9

7,767
7,677
7,736
872

Potion Vial
Find the product
 $7,846 \times 8$

7,838

Potion Vial
Find the product
 $2,327 \times 5$

11,536
2,332
11,635

WESTHAM MYSTIQUE
Name: _____
Topic: _____

Cross off the answers as you go... in the end, the spell you will know.

Once complete there's a number you'll seek... to reverse the spell of mystique.

ELDER SORCERER

1. ~~A~~
2. ~~D~~
3. ~~C~~
4. B

Potion Vial

9. ~~11~~

10. ~~11~~

BOOK OF SPELLS

13. ~~11~~

14. ~~11~~

15. ~~11~~

16. ~~11~~

MYSTIC MORPH

17. ~~11~~

18. ~~11~~

19. ~~11~~

20. ~~11~~





Now the what the be... tota "ABCD" an find the num



REVERSE THE SPELL

MYSTIC MORPH



17 Anna has 72 stickers. Henry has 43 times as many stickers as Anna. How many stickers does Henry have?

- | | |
|-------------------------------------------------------------------------------------|-------|
|  A | 3,068 |
|  B | 3,096 |
|  C | 2,952 |
|  D | 3,024 |



MYSTIC MORPH





18 Jayden saved \$43. Daniel saved 26 times as much money as Jayden. How much money did Daniel save?

- | | |
|---------------------------------------------------------------------------------------|---------|
|  A | \$1,118 |
|  B | \$1,187 |
|  C | \$2,912 |
|  D | \$1,144 |



MYSTIC MORPH





19 Ali made \$67 last summer and made 23 times as much this summer. How much did she make this summer?

- | | |
|---------------------------------------------------------------------------------------|---------|
|  A | \$1,90 |
|  B | \$1,78 |
|  C | \$2,72 |
|  D | \$1,541 |



MYSTIC MORPH

20 Tim sold 1,348 newspapers last year and 6 times as many this year. How many newspapers did he sell this year?

- | | |
|----------------------------------------------------------------------------------------|--------|
|  A | 1,354 |
|  B | 8,088 |
|  C | 48,828 |
|  D | 12,132 |



STUDENTS WILL WORK INDIVIDUALLY (OR IN PAIRS)
AND RACE TO SEE WHO CAN REVERSE THE SPELL FIRST!

PERFECT FOR:

- ✓ INDIVIDUAL WORK
- ✓ PRE-ASSESSMENT
- ✓ STATE TESTING REVIEW
- ✓ UNIT REVIEW
- ✓ SUB PLANS
- ✓ EXTENSION ACTIVITIES
- ✓ EARLY-FINISHERS
- ✓ FORMATIVE ASSESSMENT