



Review & Practice


Start 2 Finish Puzzles


Elapsed Time


ELAPSED TIME


START  What time will it be in 35 minutes?


6:05  What time was it 18 minutes ago?


7:55  What time will it be in 31 minutes?


12:38  What time will it be in 53 minutes?

8:05  What time was it 38 minutes ago?

5:07  What time will it be in 13 minutes?

6:04  What time was it 18 minutes ago?

2:31  What time will it be in 8 minutes?

8:10  What time was it 28 minutes ago?

3:46 **YOU DID IT! FINISHED**


©The Owl Teacher, 2019




Created By The Owl Teacher


ELAPSED TIME FORWARD


Cut out each strip below. Glue the start strip in the top rectangle to the left. Then solve the problem on that strip. Next, find the strip with the answer in the star. Glue that one in the next rectangle. Continue until you have arrived at the "finish" strip.

2:15  What time will it be in 30 minutes?

9:30  What time will it be in 15 minutes?

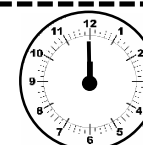
6:30  What time will it be in 45 minutes?

START  What time will it be in 15 minutes?

2:00  What time will it be in 60 minutes?

12:45 **YOU DID IT!**
FINISHED

1:15  What time will it be in 30 minutes?

2:45  What time will it be in 45 minutes?


10:45  What time will it be in 15 minutes?

5:00  What time will it be in 30 minutes?

ELAPSED TIME BACKWARD


Cut out each strip below. Glue the start strip in the top rectangle to the left. Then solve the problem on that strip. Next, find the strip with the answer in the star. Glue that one in the next rectangle. Continue until you have arrived at the "finish" strip.

9:15




What time was it 30 minutes ago?

12:45




What time was it 15 minutes ago?

7:30




What time was it 45 minutes ago?

START



What time was it 15 minutes ago?

4:00




What time was it 60 minutes ago?

2:15


**YOU DID IT!
FINISHED**

1:00




What time was it 30 minutes ago?

1:45



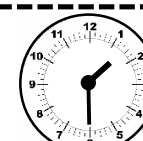
What time was it 45 minutes ago?

5:30



What time was it 15 minutes ago?


11:15



What time was it 30 minutes ago?

ELAPSED TIME FORWARD


Cut out each strip below. Glue the start strip in the top rectangle to the left. Then solve the problem on that strip. Next, find the strip with the answer in the star. Glue that one in the next rectangle. Continue until you have arrived at the "finish" strip.



What time will it be
in 20 minutes?




What time will it be
in 55 minutes?



**YOU DID IT!
FINISHED**



What time will it be
in 15 minutes?



What time will it be
in 30 minutes?



What time will it be
in 25 minutes?




What time will it be
in 10 minutes?



What time will it be
in 45 minutes?



What time will it be
in 35 minutes?



What time will it be
in 50 minutes?

ELAPSED TIME BACKWARD

Cut out each strip below. Glue the start strip in the top rectangle to the left. Then solve the problem on that strip. Next, find the strip with the answer in the star. Glue that one in the next rectangle. Continue until you have arrived at the "finish" strip.



What time was it
20 minutes ago?



What time was it
30 minutes ago?




**YOU DID IT!
FINISHED**




What time was it
10 minutes ago?





What time was it
15 minutes ago?



What time was it
45 minutes ago?



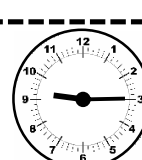
What time was it
50 minutes ago?



What time was it
25 minutes ago?



What time was it
5 minutes ago?




What time was it
35 minutes ago?


ELAPSED TIME


Cut out each strip below. Glue the start strip in the top rectangle to the left. Then solve the problem on that strip. Next, find the strip with the answer in the star. Glue that one in the next rectangle. Continue until you have arrived at the "finish" strip.


8:05  What time was it 38 minutes ago?


START  What time will it be in 35 minutes?


6:04  What time was it 18 minutes ago?

12:38  What time will it be in 53 minutes?

6:05  What time was it 18 minutes ago?

5:07  What time will it be in 13 minutes?

2:31  What time will it be in 8 minutes?

7:55  What time will it be in 31 minutes?

8:10  What time was it 28 minutes ago?

3:46 **YOU DID IT!**
FINISHED