

# Review & Practice

## Start 2 Finish Puzzles

Find the Perimeter



# Find The Perimeter











Cut out each strip below. Glue the start strip in the top rectangle to the left. Then solve the problem on that strip. Next, find the strip with the answer in the star. Glue that one in the next rectangle. Continue until you have arrived at the "finish" strip. Not to scale.

38  
UNITS

4 units 12 units

32  
UNITS

**YOU DID IT!**  
**FINISHED**

12  
UNITS

2 units 5 units

10  
UNITS

3 units 9 units

28  
UNITS

1 unit 11 units

20  
UNITS

3 units 3 units

24  
UNITS

2 units 3 units

**START**

4 units 10 units

14  
UNITS

4 units 15 units

26  
UNITS

3 units 7 units

# Find The Perimeter

Cut out each strip below. Glue the start strip in the top rectangle to the left. Then solve the problem on that strip. Next, find the strip with the answer in the star. Glue that one in the next rectangle. Continue until you have arrived at the "finish" strip. Not to scale.

36  
UNITS

24 units

12

68  
UNITS

10 units

8

18  
UNITS

8 units

3 units

6  
UNITS

8 units

6

36  
UNITS

YOU DID IT!  
FINISHED

24  
UNITS

7 units

6 units

5 units

22  
UNITS

3 units

3

3

3

3

72  
UNITS

2 units

2

2

15  
UNITS

3 units

3

3

3

3

START

5 units

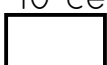
7 units

# Find The Perimeter

Cut out each strip below. Glue the start strip in the top rectangle to the left. Then solve the problem on that strip. Next, find the strip with the answer in the star. Glue that one in the next rectangle. Continue until you have arrived at the "finish" strip. Not to scale.

82  
CM

3 cm 10 centimeters

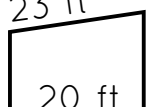


44  
CM

23 ft

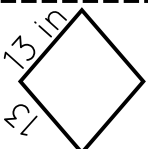
12 12

20 ft



55  
Feet


13 in



START

15

20 feet




26  
CM

ft


20 feet

15 ft



67  
Feet

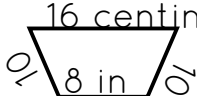
15 cm 26 centimeters



84  
Feet

16 centimeters

10 8 in 10




88  
Feet

**YOU DID IT!**  
**FINISHED**

33  
Feet

31 feet


13



52  
INCHES

9 feet

7 ft





## FIND THE PERIMETER

**START**

6 units 16 units

**44 UNITS**

5 5 units

**25 UNITS**

7 units

**21 UNITS**

9 units 14 units

**46 UNITS**

2 2 units

**24 UNITS**

16 units

**? UNITS**

26 units

**64 UNITS**

8 17 units

**50 UNITS**

10 11 units

**28 UNITS**

**YOU DID IT! FINISHED**

## FIND THE PERIMETER

**START**

9 9 units

**45 UNITS**

3 units 5 units

**16 UNITS**

32 units

**80 UNITS**

8 units

**24 UNITS**

21 units

**60 UNITS**

30 units 25

**110 UNITS**

1 units

**12 UNITS**

12 15 units

**37 UNITS**

2 units 3 units

**10 UNITS**

**YOU DID IT! FINISHED**